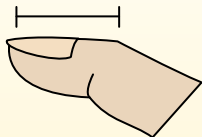



**Determine which letter best represents the length / height.****Answers****Inch (in)**

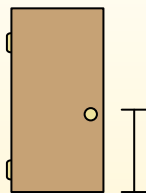
An inch is about the distance of the last joint of your finger.

**Foot (ft)**

A foot is 12 inches. The length of a ruler.

**Yard (yd)**

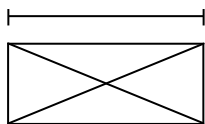
1 yard is the same as 3 feet. From the floor to a door knob is about 1 yard.

**Mile (mi)**

A mile is 5,280 feet. Most major roads are at least a mile long.



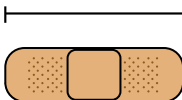
1)



Envelope

- A. 3 inches
- B. 7 inches
- C. 1 inch
- D. 1 foot

2)



Bandage

- A. 1 yard
- B. 2 feet
- C. 3 inches
- D. 2 miles


3)



Tennis Ball

- A. 3 inches
- B. 1 foot
- C. 2 feet
- D. 7 inches


4)



Lollipop

- A. 1 mile
- B. 3 inches
- C. 1 foot
- D. 5 inches

5)



Bowling Ball Height

- A. 4 inches
- B. 1 yard
- C. 10 inches
- D. 10 feet

6)



File Cabinet

- A. 11 inches
- B. 2 feet
- C. 1 foot
- D. 5 feet


7)



Pen

- A. 5 yards
- B. 5 inches
- C. 1 foot
- D. 12 inches


8)



Slice of Bread

- A. 2 yards
- B. 4 inches
- C. 10 inches
- D. 4 feet

9)



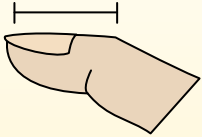
Can of Soda

- A. 1 yard
- B. 1 inch
- C. 1 foot
- D. 4 inches

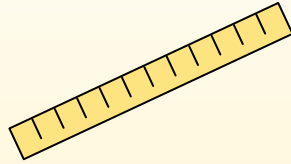
1. _____
2. _____
3. _____
4. _____
5. _____
6. _____
7. _____
8. _____
9. _____

**Determine which letter best represents the length / height.****Inch (in)**

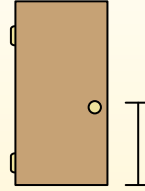
An inch is about the distance of the last joint of your finger.

**Foot (ft)**

A foot is 12 inches. The length of a ruler.

**Yard (yd)**

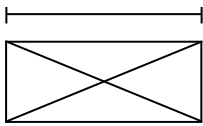
1 yard is the same as 3 feet. From the floor to a door knob is about 1 yard.

**Mile (mi)**

A mile is 5,280 feet. Most major roads are at least a mile long.



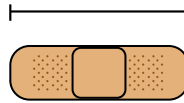
1)



Envelope

- A. 3 inches
- B. 7 inches
- C. 1 inch
- D. 1 foot

2)



Bandage

- A. 1 yard
- B. 2 feet
- C. 3 inches
- D. 2 miles


3)



Tennis Ball

- A. 3 inches
- B. 1 foot
- C. 2 feet
- D. 7 inches


4)



Lollipop

- A. 1 mile
- B. 3 inches
- C. 1 foot
- D. 5 inches

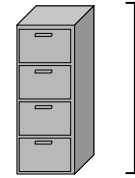
5)



Bowling Ball Height

- A. 4 inches
- B. 1 yard
- C. 10 inches
- D. 10 feet

6)



File Cabinet

- A. 11 inches
- B. 2 feet
- C. 1 foot
- D. 5 feet


7)



Pen

- A. 5 yards
- B. 5 inches
- C. 1 foot
- D. 12 inches


8)



Slice of Bread

- A. 2 yards
- B. 4 inches
- C. 10 inches
- D. 4 feet

9)



Can of Soda

- A. 1 yard
- B. 1 inch
- C. 1 foot
- D. 4 inches

Answers

- 1. **B**
- 2. **C**
- 3. **A**
- 4. **D**
- 5. **C**
- 6. **D**
- 7. **B**
- 8. **B**
- 9. **D**